

11) The floor in the house is wet. What must you do?

- (a) Don't bother about it
- (b) Dry the floor at once
- (c) Let the children play on the wet floor
- (d) Pour more water on the floor

Answer (b)

12) One jug can hold 250ml of water. How many jugs are needed to hold 750ml of water?

- (a) 7
- (b) 2
- (c) 4
- (d) 3

Answer (d)

13) You went to East Coast Park on your off day. The journey from East Coast Park to your employer's house is 45 minutes.

What time must you leave East Coast Park to reach home by 7.00pm?

- (a) Before 6.15pm
- (b) After 6.45pm
- (c) After 6.30pm
- (d) At 7.00pm


Answer (a)

14) You are given a time-table as follow:

Time	Duties
6.00am	Wake up
6.30am	Prepare breakfast
7.00am	Wake children up, give them breakfast
7.30am	Take children to school bus
7.45am	Clean children's room
8.30am	Wash clothes
9.30am	Take a rest
10.00am	Clean "Sir /Madam's" room
10.30am	Wash toilets
11.00am	Prepare lunch

When must you wash the clothes?

(a)




(b)



(c)







(d)



Answer (c)

- 15) This is a picture of a LIFT Control Panel. Which button should you press if you are going to the 10<sup>th</sup> floor?



- (a)  (b) 
- (c)  (d) 

Answer (c)

- 16) A big chocolate cake is cut into 12 pieces. It is shared equally among 3 children. How many pieces of cake will each child get?

- (a) Two (b) Three  
(c) Four (d) Five

Answer (c)

Sample questions for foreign domestic worker entry test

---

17) What is the total amount of money shown below?



- (a) \$1.60
- (b) \$5.20
- (c) \$10.60
- (d) \$10.51

Answer (c)

18) What is the total amount of money shown below?



- (a) \$1.20
- (b) \$1.40
- (c) \$1.50
- (d) \$1.30

Answer (a)

19) The prices of fruits sold in the market are displayed in the table below.

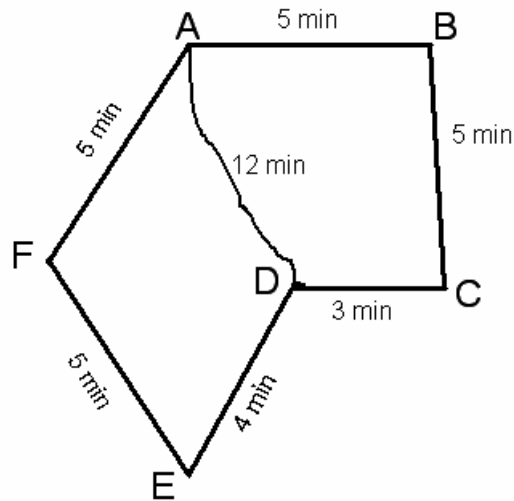
Fruit	Price
2 apples	\$1.00
1 pear	\$0.50
5 oranges	\$1.00

How much do you pay for 6 apples and 5 oranges?

- (a) \$2.00                      (b) \$4.00                      (c) \$6.00                      (d) \$8.00

Answer (b)

20) The shortest time taken to walk from Point A to Point D is \_\_\_\_\_.



- (a) 5 minutes                      (b) 12 minutes  
(c) 13 minutes                      (d) 14 minutes

Answer (b)